

## Maths - Grade 2

Count every day up to 180 in 1s, 2s, 3s, 4s, 5s and 10s forwards and backwards. You can use your number chart to help you.

### Worksheets

Counting.

Counting in 3s.

10 more and 10 less.

Bonds of 18.

2D shapes.

Days and months.

Time.

Time - story sums.

I  Maths!

## Counting

### Count in 1s forwards and backwards

142	143					148			
-----	-----	--	--	--	--	-----	--	--	--

132	131		129						
-----	-----	--	-----	--	--	--	--	--	--

### Count in 2s forwards and backwards

113	115			121			127		
-----	-----	--	--	-----	--	--	-----	--	--

164	162		158		154				
-----	-----	--	-----	--	-----	--	--	--	--

### Count in 5s forwards and backwards

125	130					155			
-----	-----	--	--	--	--	-----	--	--	--

90	85		75				55		
----	----	--	----	--	--	--	----	--	--

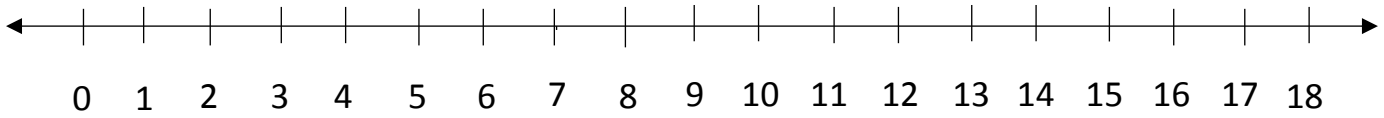
### Count in 3s forwards and backwards

51	54			63			72		
----	----	--	--	----	--	--	----	--	--

120	117		111			102	99		
-----	-----	--	-----	--	--	-----	----	--	--

## Counting in 3s

Start on 3 and circle every third number.



Fill in the missing numbers.

Forwards

3	6	9			18			
---	---	---	--	--	----	--	--	--

Forwards

103	106	109			118			
-----	-----	-----	--	--	-----	--	--	--

Backwards

60	57	54				42		
----	----	----	--	--	--	----	--	--

Backwards

160	157	154				142		
-----	-----	-----	--	--	--	-----	--	--

Complete these sequences.

36, 39, 42, 45, \_\_\_\_\_, \_\_\_\_\_, \_\_\_\_\_, \_\_\_\_\_, \_\_\_\_\_.

87, 84, 81, 78, \_\_\_\_\_, \_\_\_\_\_, \_\_\_\_\_, \_\_\_\_\_, \_\_\_\_\_.

120, 123, 126, \_\_\_\_\_, \_\_\_\_\_, \_\_\_\_\_, \_\_\_\_\_, \_\_\_\_\_.

175, 172, 169, \_\_\_\_\_, \_\_\_\_\_, \_\_\_\_\_, \_\_\_\_\_, \_\_\_\_\_.


## 10 more and 10 less

Use your number chart to help you to complete these sums.

$10 + 10 = \underline{\quad}$	$20 - 10 = \underline{\quad}$	$46 + 10 = \underline{\quad}$
$20 + 10 = \underline{\quad}$	$30 - 10 = \underline{\quad}$	$55 - 10 = \underline{\quad}$
$30 + 10 = \underline{\quad}$	$40 - 10 = \underline{\quad}$	$23 - 10 = \underline{\quad}$
$40 + 10 = \underline{\quad}$	$50 - 10 = \underline{\quad}$	$75 - 10 = \underline{\quad}$
$50 + 10 = \underline{\quad}$	$60 - 10 = \underline{\quad}$	$38 + 10 = \underline{\quad}$
$60 + 10 = \underline{\quad}$	$70 - 10 = \underline{\quad}$	$63 - 10 = \underline{\quad}$
$70 + 10 = \underline{\quad}$	$80 - 10 = \underline{\quad}$	$57 - 10 = \underline{\quad}$
$80 + 10 = \underline{\quad}$	$90 - 10 = \underline{\quad}$	$29 + 10 = \underline{\quad}$
$90 + 10 = \underline{\quad}$	$100 - 10 = \underline{\quad}$	$72 + 10 = \underline{\quad}$

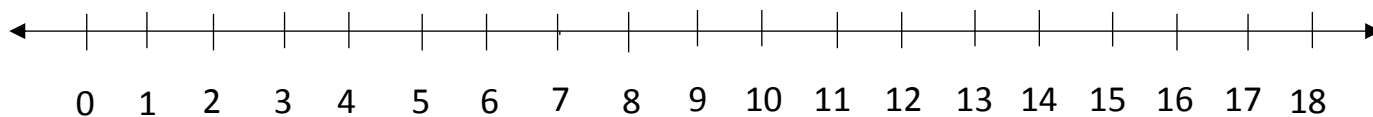
10 more than 41 is \_\_\_\_\_      10 more than 56 is \_\_\_\_\_  
10 less than 28 is \_\_\_\_\_      10 less than 60 is \_\_\_\_\_  
10 more than 62 is \_\_\_\_\_      10 more than 12 is \_\_\_\_\_  
10 less than 33 is \_\_\_\_\_      10 less than 75 is \_\_\_\_\_

### Complete

10 less		10 more
31	41	51
	65	
24		
		46

## Bonds of 18.

Please learn the bonds of 18.



$$0 + 18 = 18$$

$$18 - 18 = 0$$

$$1 + 17 = 18$$

$$18 - 17 = 1$$

$$2 + 16 = 18$$

$$18 - 16 = 2$$

$$3 + 15 = 18$$

$$18 - 15 = 3$$

$$4 + 14 = 18$$

$$18 - 14 = 4$$

$$5 + 13 = 18$$

$$18 - 13 = 5$$

$$6 + 12 = 18$$

$$18 - 12 = 6$$

$$7 + 11 = 18$$

$$18 - 11 = 7$$

$$8 + 10 = 18$$

$$18 - 10 = 8$$

$$9 + 9 = 18$$

$$18 - 9 = 9$$

$$10 + 8 = 18$$

$$18 - 8 = 10$$

$$11 + 7 = 18$$

$$18 - 7 = 11$$

$$12 + 6 = 18$$

$$18 - 6 = 12$$

$$13 + 5 = 18$$

$$18 - 5 = 13$$

$$14 + 4 = 18$$

$$18 - 4 = 14$$

$$15 + 3 = 18$$

$$18 - 3 = 15$$

$$16 + 2 = 18$$

$$18 - 2 = 16$$

$$17 + 1 = 18$$

$$18 - 1 = 17$$

$$18 + 0 = 18$$

$$18 - 0 = 18$$

Complete the bonds of 18 and then write the matching plus and minus sums.

18	
10	8
17	1
	14
6	
	9
7	
	13
2	

plus
$10 + 8 = 18$
$17 + 1 = 18$

minus
$18 - 8 = 10$
$18 - 1 = 17$

$$7 + 7 + \square = 18$$

$$5 + 5 + \square = 18$$

$$9 + 9 = \square$$

$$2+2+2+2+2+2+2+2 = \square$$

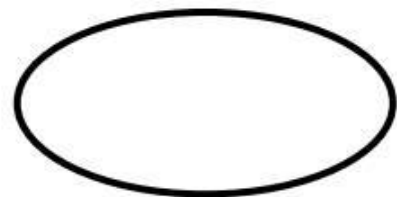


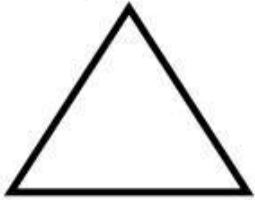
$$2 \times 9 = \square$$

$$9 \times 2 = \square$$

Grade 2 – Week 2: 2D Shapes

Fill in the correct answer:

square    rectangle    heart    circle  
diamond    star    oval    triangle



## Grade 2 – Week 5 : Days of the week and months of the year

Fill in the missing words:

twelve    Tuesday    Friday    seven  
January    December    five    July

1. The first month of the year is \_\_\_\_\_ .
2. There are \_\_\_\_\_ school days in a week.
3. The third day of the week is \_\_\_\_\_ .
4. There are \_\_\_\_\_ months in a year.
5. After Thursday is \_\_\_\_\_ .
6. Before August is \_\_\_\_\_ .
7. There are \_\_\_\_\_ days in a week.
8. The last month of the year is \_\_\_\_\_ .



# Grade 2 - Week 8: Time

Fill in the correct time:

Use these words to assist you

half past \_\_\_\_\_ OR \_\_\_\_\_ o' clock

1.



2.



3.



4.



5.



6.



## Time

Complete these story sums.

Mrs Sibande starts work in the sweet shop at 8 o'clock in the morning. She closes the shop at 12 o'clock midday. How many hours does she work for?

Number sentence: \_\_\_\_\_

Sum: \_\_\_\_\_

Answer: \_\_\_\_\_

---

My father drove his car to Durban. He left at 7 o'clock in the morning and arrived at 2 o'clock in the afternoon. How long did it take him to get there?

Number sentence: \_\_\_\_\_

Sum: \_\_\_\_\_


Answer: \_\_\_\_\_

---


## Time

Draw a picture of something you can do for:


10 seconds



10 minutes



10 hours



10 days

